

Notes – Level 3

Maths

Show working for this Section: 6

Section 6

For the following group of questions, show working in the spaces below. Choose or write the correct answer on your computer.

Add.

$$\begin{array}{r} 526 \\ + 87 \\ \hline \end{array}$$

$$\begin{array}{r} 389 \\ + 76 \\ \hline \end{array}$$

$$\begin{array}{r} 663 \\ + 189 \\ \hline \end{array}$$

$$\begin{array}{r} 229 \\ + 175 \\ \hline \end{array}$$

Subtract.

$$\begin{array}{r} 972 \\ - 93 \\ \hline \end{array}$$

$$\begin{array}{r} 686 \\ - 87 \\ \hline \end{array}$$



$$\begin{array}{r} 425 \\ - 126 \\ \hline \end{array}$$

$$\begin{array}{r} 542 \\ - 159 \\ \hline \end{array}$$

SHOW WORKING HERE

[Office use only 1031: 1-8]

Section 11

 Penny = 1 cent	 Dime = 10 cents	 One Dollar	 Ten Dollars
 Nickel = 5 cents	 Quarter = 25 cents	 Five Dollars	

Note non-metric measures:


Choose the right answer.

Cup Cup




$$+ = \text{1 pint}$$

Pint Pint



$$+ = \text{1 quart}$$

Quart Quart Quart Quart



$$+ + + = \text{1 gallon}$$